

Practice revision questions on Transport and Industry

1. Which type of transport suits the following journeys best (choose from road, rail, air or sea):-

(i) Transporting fresh fruit from an Essex farm to Tiptree Jam factory.

(ii) Moving 300,000 tonnes of crude oil from Saudia Arabia to Holland.

(iii) Transporting 10,000 tonnes of coal from Warsaw to Moscow.

(iv) Moving 10,000 I pads from Taiwan to Manchester.

2. For two of the above journeys, explain fully why a business man/woman would choose the same transport type as you.

Journey 1:-

.....
.....
.....
.....
.....

Journey 2:-

.....

.....

.....

.....

.....

(3)

3. Complete the following table to show the advantages and disadvantages of different forms of transport.

Type of transport	Advantages	Disadvantages
Car	Access most places on land where there are roads. Cost effective. Convenient – journey when you want.	
Rail		Can be expensive. Sometimes there can be delays. Can only link places with train stations.
Air		
Sea		

5. Using arrows, link the jobs shown in the pictures to the correct category:-



Secondary



Primary



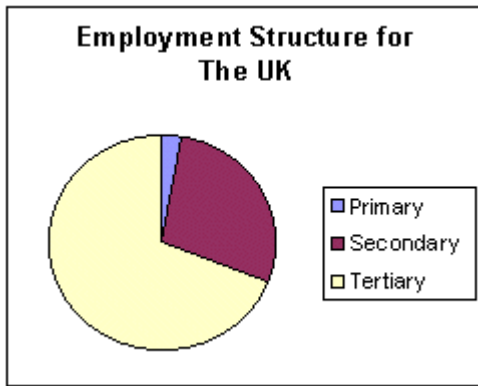


Quaternary



Tertiary

6. Look at the following pie charts showing the percentage of people employed in each sector for three countries.



Describe and explain the differences.

.....

.....

.....

.....
.....
.....
.....
.....

(5)

7. For an economic activity you have studied, explain the human and physical factors which have influenced the location of different parts of the business. Refer to named developed and developing countries in your answer.

.....
.....
.....
.....
.....
.....
.....
.....
.....
.....
.....
.....
.....
.....
.....
.....
.....
.....
.....
.....
.....

(5)